

Numeracy Year 9 – Week 5: Space

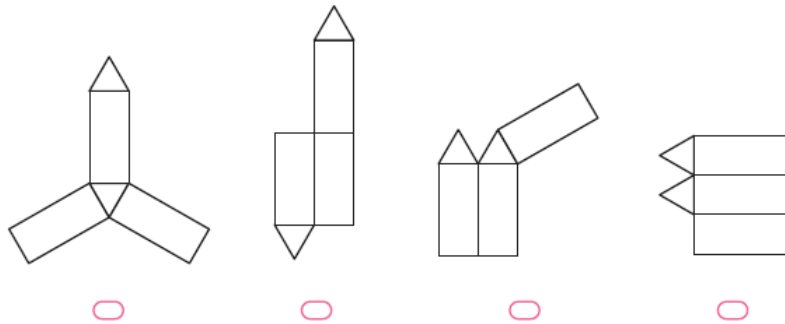
STUDENT WORKSHEET

Focus of the week

Visualising 3D objects from nets

Question 1

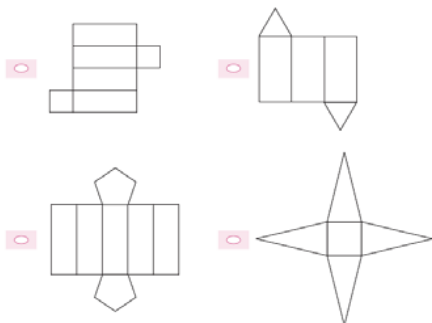
Which diagram is the net of a triangular prism?



Question 2

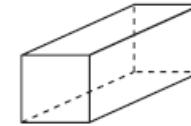
Which one of the following is a net of a 3D object with:

- exactly 5 faces; and
- exactly two parallel faces.



Question 3

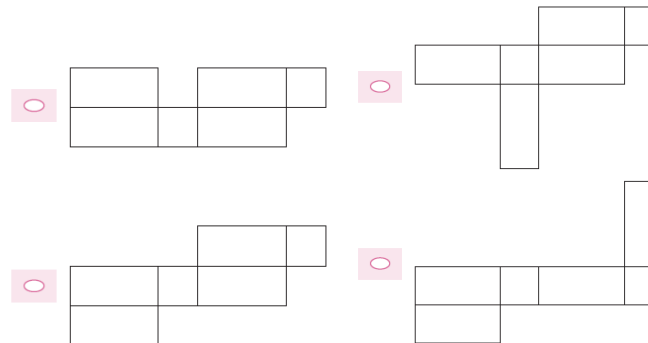
This is a diagram of a prism.



Shade one bubble.



Which one of the following is **not** a net of this prism?



Challenge Question

Draw a 3D object that has:

- six rectangular faces;
- six triangular faces;
- eight triangular faces.