

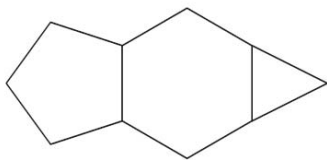
Numeracy Year 9 – Week 3: Space

STUDENT WORKSHEET


Focus of the week

Identifying and naming 2D shapes

Question 1



Shade one bubble.



Which three shapes were used to make this picture?

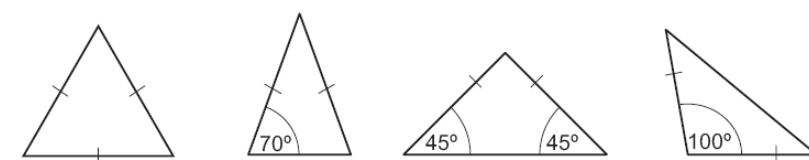
- triangle, hexagon and square
- triangle, pentagon and square
- pentagon, hexagon and triangle
- hexagon, pentagon and square

Question 2

What shapes would you need in a net to make an octagonal prism?

Question 3

Which one of these is a right-angled isosceles triangle?



Not to scale

Challenge Question

Peter drew a triangle **ABC** with a right angle at **A**. **M** is the midpoint of side **BC**.

Which is his triangle?

Shade one bubble.

